



Find the value that correctly balances the equation.

Ex) 6 hundreds = 60 tens

Answers

Ex. 60

1) _____ tens = 80 ones

1. _____

2) 50 ones = _____ tens

2. _____

3) 80 tens = _____ hundreds

3. _____

4) _____ tens = 50 ones

4. _____

5) 8 thousands = _____ hundreds

5. _____

6) _____ ten = 10 ones

6. _____

7) 1 ten = _____ ones

7. _____

8) _____ ones = 3 tens

8. _____

9) _____ tens = 4 hundreds

9. _____

10) _____ ones = 1 ten

10. _____

11) _____ tens = 5 thousands

11. _____

12) 9 thousands = _____ tens

12. _____

13) _____ ones = 7 hundreds

13. _____

14) _____ hundreds = 400 ones

14. _____

15) _____ hundreds = 9 thousands

15. _____

16) 90 tens = _____ hundreds

16. _____

17) _____ ones = 1 thousand

17. _____

18) 9 hundreds = _____ tens

18. _____

19) _____ tens = 2 thousands

19. _____

20) 900 tens = _____ thousands

20. _____

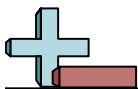


Find the value that correctly balances the equation.

- Ex) 6 hundreds = 60 tens
- 1) 8 tens = 80 ones
- 2) 50 ones = 5 tens
- 3) 80 tens = 8 hundreds
- 4) 5 tens = 50 ones
- 5) 8 thousands = 80 hundreds
- 6) 1 ten = 10 ones
- 7) 1 ten = 10 ones
- 8) 30 ones = 3 tens
- 9) 40 tens = 4 hundreds
- 10) 10 ones = 1 ten
- 11) 500 tens = 5 thousands
- 12) 9 thousands = 900 tens
- 13) 700 ones = 7 hundreds
- 14) 4 hundreds = 400 ones
- 15) 90 hundreds = 9 thousands
- 16) 90 tens = 9 hundreds
- 17) 1,000 ones = 1 thousand
- 18) 9 hundreds = 90 tens
- 19) 200 tens = 2 thousands
- 20) 900 tens = 9 thousands

Answers

- Ex. 60
- 1. 8
- 2. 5
- 3. 8
- 4. 5
- 5. 80
- 6. 1
- 7. 10
- 8. 30
- 9. 40
- 10. 10
- 11. 500
- 12. 900
- 13. 700
- 14. 4
- 15. 90
- 16. 9
- 17. 1,000
- 18. 90
- 19. 200
- 20. 9



Find the value that correctly balances the equation.

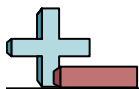
Ex) 4,000 ones = 4 thousands

Answers

Ex. 4

- 1) _____ ones = 9 tens
- 2) 30 ones = _____ tens
- 3) _____ thousand = 1,000 ones
- 4) _____ tens = 2 thousands
- 5) 600 ones = _____ hundreds
- 6) 300 ones = _____ hundreds
- 7) _____ tens = 1 hundred
- 8) _____ tens = 7 hundreds
- 9) 6 thousands = _____ tens
- 10) 3 hundreds = _____ ones
- 11) 7 tens = _____ ones
- 12) 20 hundreds = _____ thousands
- 13) _____ tens = 20 ones
- 14) _____ ten = 10 ones
- 15) 5 thousands = _____ ones
- 16) 60 ones = _____ tens
- 17) _____ ones = 7 thousands
- 18) 6 hundreds = _____ tens
- 19) _____ ones = 9 hundreds
- 20) 3 tens = _____ ones

- 1. _____
- 2. _____
- 3. _____
- 4. _____
- 5. _____
- 6. _____
- 7. _____
- 8. _____
- 9. _____
- 10. _____
- 11. _____
- 12. _____
- 13. _____
- 14. _____
- 15. _____
- 16. _____
- 17. _____
- 18. _____
- 19. _____
- 20. _____



Find the value that correctly balances the equation.

Ex) 4,000 ones = 4 thousands

1) 90 ones = 9 tens

2) 30 ones = 3 tens

3) 1 thousand = 1,000 ones

4) 200 tens = 2 thousands

5) 600 ones = 6 hundreds

6) 300 ones = 3 hundreds

7) 10 tens = 1 hundred

8) 70 tens = 7 hundreds

9) 6 thousands = 600 tens

10) 3 hundreds = 300 ones

11) 7 tens = 70 ones

12) 20 hundreds = 2 thousands

13) 2 tens = 20 ones

14) 1 ten = 10 ones

15) 5 thousands = 5,000 ones

16) 60 ones = 6 tens

17) 7,000 ones = 7 thousands

18) 6 hundreds = 60 tens

19) 900 ones = 9 hundreds

20) 3 tens = 30 ones

Answers

Ex. 4

1. 90

2. 3

3. 1

4. 200

5. 6

6. 3

7. 10

8. 70

9. 600

10. 300

11. 70

12. 2

13. 2

14. 1

15. 5,000

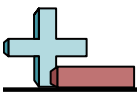
16. 6

17. 7,000

18. 60

19. 900

20. 30



Find the value that correctly balances the equation.

Ex) 10 ones = 1 ten

Answers

Ex. 10

1) _____ hundreds = 5 thousands

1. _____

2) 2 thousands = _____ hundreds

2. _____

3) _____ hundreds = 90 tens

3. _____

4) _____ thousands = 2,000 ones

4. _____

5) _____ tens = 6 thousands

5. _____

6) _____ hundreds = 800 ones

6. _____

7) _____ ones = 8 tens

7. _____

8) 3 hundreds = _____ ones

8. _____

9) _____ thousands = 500 tens

9. _____

10) _____ tens = 50 ones

10. _____

11) _____ ten = 10 ones

11. _____

12) 800 ones = _____ hundreds

12. _____

13) _____ ones = 4 tens

13. _____

14) _____ ones = 9 thousands

14. _____

15) _____ ones = 1 thousand

15. _____

16) _____ hundred = 100 ones

16. _____

17) 8 hundreds = _____ tens

17. _____

18) _____ tens = 70 ones

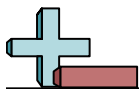
18. _____

19) _____ tens = 9 hundreds

19. _____

20) 60 ones = _____ tens

20. _____



Find the value that correctly balances the equation.

- Ex) 10 ones = 1 ten
- 1) 50 hundreds = 5 thousands
- 2) 2 thousands = 20 hundreds
- 3) 9 hundreds = 90 tens
- 4) 2 thousands = 2,000 ones
- 5) 600 tens = 6 thousands
- 6) 8 hundreds = 800 ones
- 7) 80 ones = 8 tens
- 8) 3 hundreds = 300 ones
- 9) 5 thousands = 500 tens
- 10) 5 tens = 50 ones
- 11) 1 ten = 10 ones
- 12) 800 ones = 8 hundreds
- 13) 40 ones = 4 tens
- 14) 9,000 ones = 9 thousands
- 15) 1,000 ones = 1 thousand
- 16) 1 hundred = 100 ones
- 17) 8 hundreds = 80 tens
- 18) 7 tens = 70 ones
- 19) 90 tens = 9 hundreds
- 20) 60 ones = 6 tens

Answers

- Ex. 10
1. 50
2. 20
3. 9
4. 2
5. 600
6. 8
7. 80
8. 300
9. 5
10. 5
11. 1
12. 8
13. 40
14. 9,000
15. 1,000
16. 1
17. 80
18. 7
19. 90
20. 6



Find the value that correctly balances the equation.

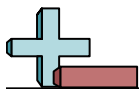
Ex) 7,000 ones = 7 thousands

Answers

Ex. 7,000

- 1) 8 hundreds = _____ tens
- 2) _____ tens = 3 hundreds
- 3) _____ ones = 4 hundreds
- 4) _____ ones = 9 tens
- 5) _____ ones = 4 tens
- 6) 800 ones = _____ hundreds
- 7) 7,000 ones = _____ thousands
- 8) _____ ones = 6 tens
- 9) _____ tens = 1 hundred
- 10) _____ thousands = 8,000 ones
- 11) _____ ones = 2 tens
- 12) _____ hundreds = 70 tens
- 13) 2 tens = _____ ones
- 14) 3,000 ones = _____ thousands
- 15) 4 tens = _____ ones
- 16) 50 hundreds = _____ thousands
- 17) 3 hundreds = _____ ones
- 18) _____ thousands = 600 tens
- 19) 500 tens = _____ thousands
- 20) 7 tens = _____ ones

- 1. _____
- 2. _____
- 3. _____
- 4. _____
- 5. _____
- 6. _____
- 7. _____
- 8. _____
- 9. _____
- 10. _____
- 11. _____
- 12. _____
- 13. _____
- 14. _____
- 15. _____
- 16. _____
- 17. _____
- 18. _____
- 19. _____
- 20. _____



Find the value that correctly balances the equation.

Ex) 7,000 ones = 7 thousands

1) 8 hundreds = 80 tens

2) 30 tens = 3 hundreds

3) 400 ones = 4 hundreds

4) 90 ones = 9 tens

5) 40 ones = 4 tens

6) 800 ones = 8 hundreds

7) 7,000 ones = 7 thousands

8) 60 ones = 6 tens

9) 10 tens = 1 hundred

10) 8 thousands = 8,000 ones

11) 20 ones = 2 tens

12) 7 hundreds = 70 tens

13) 2 tens = 20 ones

14) 3,000 ones = 3 thousands

15) 4 tens = 40 ones

16) 50 hundreds = 5 thousands

17) 3 hundreds = 300 ones

18) 6 thousands = 600 tens

19) 500 tens = 5 thousands

20) 7 tens = 70 ones

Answers

Ex. 7,000

1. 80

2. 30

3. 400

4. 90

5. 40

6. 8

7. 7

8. 60

9. 10

10. 8

11. 20

12. 7

13. 20

14. 3

15. 40

16. 5

17. 300

18. 6

19. 5

20. 70



Find the value that correctly balances the equation.

Ex) 9 hundreds = 900 ones

Answers

Ex. 900

1) _____ tens = 90 ones

1. _____

2) 30 hundreds = _____ thousands

2. _____

3) 9 tens = _____ ones

3. _____

4) 7 tens = _____ ones

4. _____

5) _____ tens = 20 ones

5. _____

6) 50 ones = _____ tens

6. _____

7) 4,000 ones = _____ thousands

7. _____

8) 4 tens = _____ ones

8. _____

9) _____ thousands = 4,000 ones

9. _____

10) 8 thousands = _____ tens

10. _____

11) 90 ones = _____ tens

11. _____

12) 40 hundreds = _____ thousands

12. _____

13) _____ ones = 9 hundreds

13. _____

14) 60 tens = _____ hundreds

14. _____

15) _____ hundreds = 40 tens

15. _____

16) 6 thousands = _____ tens

16. _____

17) _____ hundreds = 80 tens

17. _____

18) _____ hundreds = 500 ones

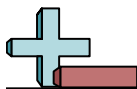
18. _____

19) 3 hundreds = _____ tens

19. _____

20) _____ ones = 4 thousands

20. _____



Find the value that correctly balances the equation.

Ex) 9 hundreds = 900 ones

1) 9 tens = 90 ones

2) 30 hundreds = 3 thousands

3) 9 tens = 90 ones

4) 7 tens = 70 ones

5) 2 tens = 20 ones

6) 50 ones = 5 tens

7) 4,000 ones = 4 thousands

8) 4 tens = 40 ones

9) 4 thousands = 4,000 ones

10) 8 thousands = 800 tens

11) 90 ones = 9 tens

12) 40 hundreds = 4 thousands

13) 900 ones = 9 hundreds

14) 60 tens = 6 hundreds

15) 4 hundreds = 40 tens

16) 6 thousands = 600 tens

17) 8 hundreds = 80 tens

18) 5 hundreds = 500 ones

19) 3 hundreds = 30 tens

20) 4,000 ones = 4 thousands

Answers

Ex. 900

1. 9

2. 3

3. 90

4. 70

5. 2

6. 5

7. 4

8. 40

9. 4

10. 800

11. 9

12. 4

13. 900

14. 6

15. 4

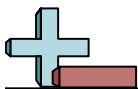
16. 600

17. 8

18. 5

19. 30

20. 4,000



Find the value that correctly balances the equation.

Ex) 80 ones = 8 tens

Answers

Ex. 8

1) 600 ones = _____ hundreds

1. _____

2) _____ thousands = 60 hundreds

2. _____

3) _____ ones = 7 thousands

3. _____

4) _____ ones = 3 tens

4. _____

5) 5 tens = _____ ones

5. _____

6) 20 ones = _____ tens

6. _____

7) _____ hundreds = 9 thousands

7. _____

8) 7,000 ones = _____ thousands

8. _____

9) _____ hundreds = 20 tens

9. _____

10) 9 thousands = _____ hundreds

10. _____

11) 3 hundreds = _____ tens

11. _____

12) 30 ones = _____ tens

12. _____

13) 4 hundreds = _____ tens

13. _____

14) 1 hundred = _____ ones

14. _____

15) _____ ones = 1 hundred

15. _____

16) _____ thousand = 1,000 ones

16. _____

17) _____ ten = 10 ones

17. _____

18) _____ thousands = 4,000 ones

18. _____

19) 50 ones = _____ tens

19. _____

20) _____ tens = 6 hundreds

20. _____



Find the value that correctly balances the equation.

Ex) 80 ones = 8 tens

1) 600 ones = 6 hundreds

2) 6 thousands = 60 hundreds

3) 7,000 ones = 7 thousands

4) 30 ones = 3 tens

5) 5 tens = 50 ones

6) 20 ones = 2 tens

7) 90 hundreds = 9 thousands

8) 7,000 ones = 7 thousands

9) 2 hundreds = 20 tens

10) 9 thousands = 90 hundreds

11) 3 hundreds = 30 tens

12) 30 ones = 3 tens

13) 4 hundreds = 40 tens

14) 1 hundred = 100 ones

15) 100 ones = 1 hundred

16) 1 thousand = 1,000 ones

17) 1 ten = 10 ones

18) 4 thousands = 4,000 ones

19) 50 ones = 5 tens

20) 60 tens = 6 hundreds

Answers

Ex. 8

1. 6

2. 6

3. 7,000

4. 30

5. 50

6. 2

7. 90

8. 7

9. 2

10. 90

11. 30

12. 3

13. 40

14. 100

15. 100

16. 1

17. 1

18. 4

19. 5

20. 60



Find the value that correctly balances the equation.

Ex) 60 ones = 6 tens

Answers

Ex. 6

1) 700 ones = _____ hundreds

1. _____

2) 500 ones = _____ hundreds

2. _____

3) _____ ones = 4 tens

3. _____

4) 9 hundreds = _____ ones

4. _____

5) _____ tens = 70 ones

5. _____

6) 8 thousands = _____ hundreds

6. _____

7) _____ thousands = 2,000 ones

7. _____

8) _____ thousands = 700 tens

8. _____

9) _____ tens = 20 ones

9. _____

10) _____ tens = 8 hundreds

10. _____

11) 50 tens = _____ hundreds

11. _____

12) 6 thousands = _____ hundreds

12. _____

13) 2 tens = _____ ones

13. _____

14) 7 tens = _____ ones

14. _____

15) _____ ones = 7 hundreds

15. _____

16) 20 hundreds = _____ thousands

16. _____

17) _____ hundreds = 40 tens

17. _____

18) _____ tens = 4 thousands

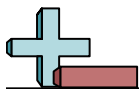
18. _____

19) _____ ones = 9 tens

19. _____

20) 5 thousands = _____ tens

20. _____



Find the value that correctly balances the equation.

Ex) 60 ones = 6 tens

1) 700 ones = 7 hundreds

2) 500 ones = 5 hundreds

3) 40 ones = 4 tens

4) 9 hundreds = 900 ones

5) 7 tens = 70 ones

6) 8 thousands = 80 hundreds

7) 2 thousands = 2,000 ones

8) 7 thousands = 700 tens

9) 2 tens = 20 ones

10) 80 tens = 8 hundreds

11) 50 tens = 5 hundreds

12) 6 thousands = 60 hundreds

13) 2 tens = 20 ones

14) 7 tens = 70 ones

15) 700 ones = 7 hundreds

16) 20 hundreds = 2 thousands

17) 4 hundreds = 40 tens

18) 400 tens = 4 thousands

19) 90 ones = 9 tens

20) 5 thousands = 500 tens

Answers

Ex. 6

1. 7

2. 5

3. 40

4. 900

5. 7

6. 80

7. 2

8. 7

9. 2

10. 80

11. 5

12. 60

13. 20

14. 70

15. 700

16. 2

17. 4

18. 400

19. 90

20. 500



Find the value that correctly balances the equation.

Ex) 50 hundreds = 5 thousands

Answers

Ex. 5

1) _____ ones = 6 tens

1. _____

2) _____ hundreds = 20 tens

2. _____

3) _____ hundreds = 2 thousands

3. _____

4) _____ ones = 5 tens

4. _____

5) _____ tens = 60 ones

5. _____

6) _____ thousands = 300 tens

6. _____

7) _____ ones = 3 tens

7. _____

8) 10 tens = _____ hundred

8. _____

9) _____ ones = 7 hundreds

9. _____

10) 30 hundreds = _____ thousands

10. _____

11) 6 thousands = _____ tens

11. _____

12) _____ ones = 1 ten

12. _____

13) 20 hundreds = _____ thousands

13. _____

14) _____ tens = 4 thousands

14. _____

15) _____ tens = 40 ones

15. _____

16) 60 tens = _____ hundreds

16. _____

17) 40 ones = _____ tens

17. _____

18) _____ hundreds = 700 ones

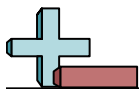
18. _____

19) 3 hundreds = _____ tens

19. _____

20) _____ hundreds = 70 tens

20. _____



Find the value that correctly balances the equation.

Ex) 50 hundreds = 5 thousands

1) 60 ones = 6 tens

2) 2 hundreds = 20 tens

3) 20 hundreds = 2 thousands

4) 50 ones = 5 tens

5) 6 tens = 60 ones

6) 3 thousands = 300 tens

7) 30 ones = 3 tens

8) 10 tens = 1 hundred

9) 700 ones = 7 hundreds

10) 30 hundreds = 3 thousands

11) 6 thousands = 600 tens

12) 10 ones = 1 ten

13) 20 hundreds = 2 thousands

14) 400 tens = 4 thousands

15) 4 tens = 40 ones

16) 60 tens = 6 hundreds

17) 40 ones = 4 tens

18) 7 hundreds = 700 ones

19) 3 hundreds = 30 tens

20) 7 hundreds = 70 tens

Answers

Ex. 5

1. 60

2. 2

3. 20

4. 50

5. 6

6. 3

7. 30

8. 1

9. 700

10. 3

11. 600

12. 10

13. 2

14. 400

15. 4

16. 6

17. 4

18. 7

19. 30

20. 7



Find the value that correctly balances the equation.

Ex) 8 tens = 80 ones

Answers

Ex. 80

1) 7 tens = _____ ones

1. _____

2) _____ thousands = 500 tens

2. _____

3) _____ tens = 20 ones

3. _____

4) 1 hundred = _____ ones

4. _____

5) 20 ones = _____ tens

5. _____

6) 70 hundreds = _____ thousands

6. _____

7) 9 thousands = _____ tens

7. _____

8) _____ hundreds = 1 thousand

8. _____

9) 500 tens = _____ thousands

9. _____

10) _____ tens = 2 hundreds

10. _____

11) _____ ones = 9 tens

11. _____

12) _____ hundreds = 70 tens

12. _____

13) 4 tens = _____ ones

13. _____

14) _____ hundreds = 300 ones

14. _____

15) 5 tens = _____ ones

15. _____

16) _____ thousands = 600 tens

16. _____

17) 900 tens = _____ thousands

17. _____

18) _____ hundreds = 50 tens

18. _____

19) _____ ones = 2 hundreds

19. _____

20) _____ ones = 6 hundreds

20. _____



Find the value that correctly balances the equation.

Ex) 8 tens = 80 ones

1) 7 tens = 70 ones

2) 5 thousands = 500 tens

3) 2 tens = 20 ones

4) 1 hundred = 100 ones

5) 20 ones = 2 tens

6) 70 hundreds = 7 thousands

7) 9 thousands = 900 tens

8) 10 hundreds = 1 thousand

9) 500 tens = 5 thousands

10) 20 tens = 2 hundreds

11) 90 ones = 9 tens

12) 7 hundreds = 70 tens

13) 4 tens = 40 ones

14) 3 hundreds = 300 ones

15) 5 tens = 50 ones

16) 6 thousands = 600 tens

17) 900 tens = 9 thousands

18) 5 hundreds = 50 tens

19) 200 ones = 2 hundreds

20) 600 ones = 6 hundreds

Answers

Ex. 80

1. 70

2. 5

3. 2

4. 100

5. 2

6. 7

7. 900

8. 10

9. 5

10. 20

11. 90

12. 7

13. 40

14. 3

15. 50

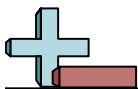
16. 6

17. 9

18. 5

19. 200

20. 600



Find the value that correctly balances the equation.

Ex) 50 ones = 5 tens

1) _____ tens = 90 ones

2) 8 tens = _____ ones

3) 40 tens = _____ hundreds

4) _____ hundreds = 7 thousands

5) 90 tens = _____ hundreds

6) _____ thousands = 2,000 ones

7) 30 tens = _____ hundreds

8) _____ ones = 9 tens

9) 500 tens = _____ thousands

10) 10 ones = _____ ten

11) _____ thousands = 20 hundreds

12) _____ ones = 4 tens

13) _____ tens = 40 ones

14) _____ thousands = 50 hundreds

15) 400 tens = _____ thousands

16) _____ ones = 6 hundreds

17) 20 tens = _____ hundreds

18) _____ hundreds = 300 ones

19) 1,000 ones = _____ thousand

20) 700 ones = _____ hundreds

Answers

Ex. 50

1. _____

2. _____

3. _____

4. _____

5. _____

6. _____

7. _____

8. _____

9. _____

10. _____

11. _____

12. _____

13. _____

14. _____

15. _____

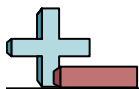
16. _____

17. _____

18. _____

19. _____

20. _____



Find the value that correctly balances the equation.

Ex) 50 ones = 5 tens

1) 9 tens = 90 ones

2) 8 tens = 80 ones

3) 40 tens = 4 hundreds

4) 70 hundreds = 7 thousands

5) 90 tens = 9 hundreds

6) 2 thousands = 2,000 ones

7) 30 tens = 3 hundreds

8) 90 ones = 9 tens

9) 500 tens = 5 thousands

10) 10 ones = 1 ten

11) 2 thousands = 20 hundreds

12) 40 ones = 4 tens

13) 4 tens = 40 ones

14) 5 thousands = 50 hundreds

15) 400 tens = 4 thousands

16) 600 ones = 6 hundreds

17) 20 tens = 2 hundreds

18) 3 hundreds = 300 ones

19) 1,000 ones = 1 thousand

20) 700 ones = 7 hundreds

Answers

Ex. 50

1. 9

2. 80

3. 4

4. 70

5. 9

6. 2

7. 3

8. 90

9. 5

10. 1

11. 2

12. 40

13. 4

14. 5

15. 4

16. 600

17. 2

18. 3

19. 1

20. 7